

4/9 samples

BUDHA DAL PUBLIC SCHOOL, PATIALA

Term-1

Subject: EVS 2

Session: 2023-24

Name- _____

Class - 3

Section- _____

Roll No. _____

SET - B

Date-08.09.23

Time- 3 hrs

M.M- 60

I. Circle the correct options

(10)

1. What is drawn to mark events in the order in which they took place?

- a) lifeline b) number line c) future d) timeline

2.  stands for

- a) danger b) stop c) recycle d) no parking

3. Sahibzada Ajit Singh Nagar is the new name of

- a) Chandigarh b) Mohali c) Kolkata d) Bengaluru

4. A very useful and important invention was _____

- a) carriage b) wheel c) bullock cart d) roads

5. What do we have to imagine to draw the map of a classroom?

- a) no walls b) no floor c) no ceiling d) no door

6. What did early human beings make using bones of animals?

- a) tools b) weapons c) jewellery d) all of these

7. Where did the early human beings live?

- a) on the roads b) in rivers c) in buildings d) in caves

8. India has _____ states.

- a) 27 b) 28 c) 29 d) 26

9. Which state is Dehradun the capital of?

- a) Goa b) Uttarakhand c) Kerala d) Assam

10. Which of the following is an example of public transport?

- a) scooter b) bicycle c) bus d) helicopter

II. Write true or false:

1. Someone who writes news for a newspaper or magazine is known as an architect. _____
2. More than half of Indian people live in villages. _____
3. Books are the oral source of history. _____
4. An ape is an animal that is like a monkey but does not have a tail. _____
5. Early humans made clothes from skin of animals. _____

III. Answer the following questions:

1. Why are landmarks useful? Give reasons.

2. ~~Where is the~~ ^{What a} union territory? Name one union territory. (2)

3. How did early human beings learn to make fire? (2)

4. . What is a tool? Give an example. (2)

5. How can history help a potter and a doctor with what they do? (2)

6. Define a map.

7. Explain the duties of the government.

(3)

8. Describe the work of an archaeologist.

(3)

9. How did early human beings start cooking their food?

(3)

...ly humans began
helped modern
Write

Early humans began farming and using the wheel. How has that helped modern humans?




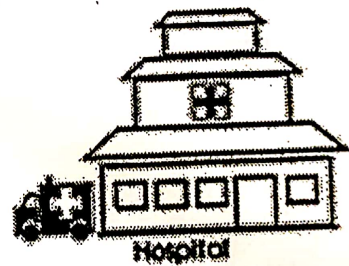

or

Write 4 differences between a village and a city.

(4)

IV. Look at the map and answer the following questions.

(3)



A) What is to the north of the bank? _____

B) What is to the west of the school? _____

C) What is to the east of the bank? _____

V. Match the columns:

1. Danger

Nagaland



2. No parking

3. Kohima

key

4. Entertainment facility

Chennai

5. Madras



6. Symbols and colours

Shopping centre

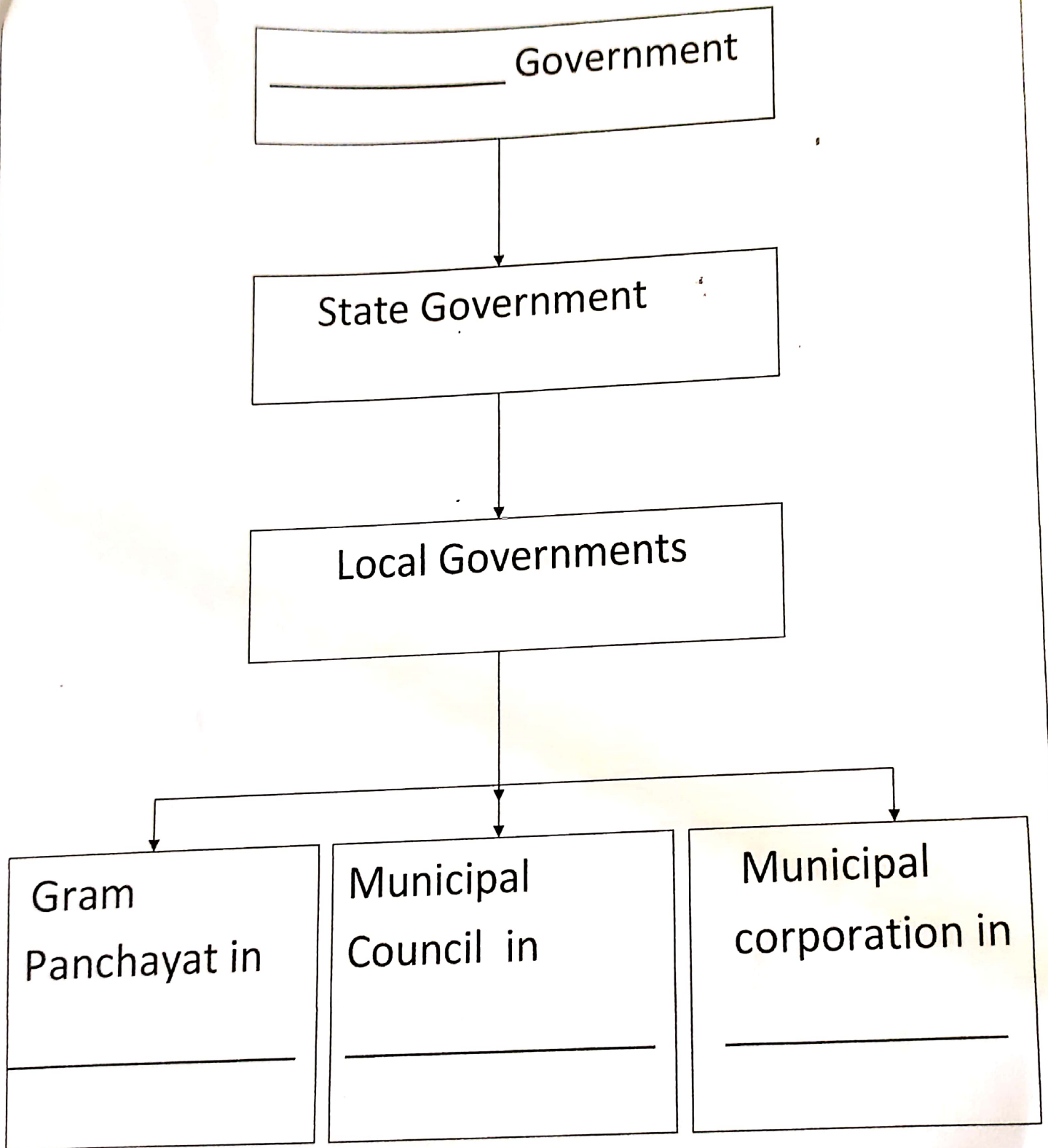
VI. Fill in the blanks:

(5)

1. _____ were sharp stones that were used to clean the skin of animals.
2. India is the world's _____ largest country
3. The word 'history' comes from _____ language.
4. A _____ is an instrument used to show directions.
5. _____ is the smallest Indian state.

11. Complete the following chart :

(4)



VIII. Mark the following places on the map of India.

(5)

1. Himachal Pradesh
2. Goa
3. Andaman and Nicobar
4. Kerala
5. Rajasthan

